

Obsah



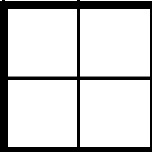
1 cm²

čteme jeden centimetr čtvereční

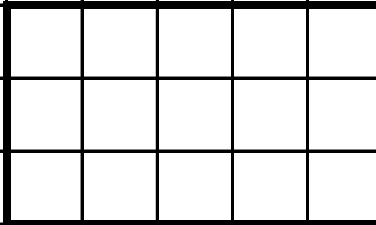
Jaký je obsah obrazců A,B,C,D,E,F?

Každý útvar si vybarvi barevně a vepíše do něj velikost jeho obsahu.

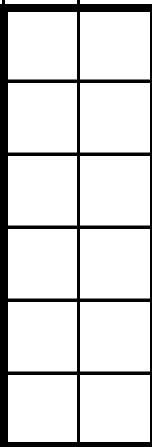
A




B



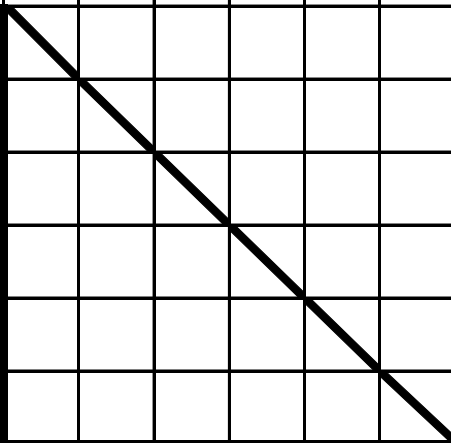
C



D



E



F

